

SANSKAR SCHOOL
GRADE-5
Assignment 18
Date: Monday, 2nd August 2021

ENGLISH:

Task 1 Read and complete the worksheet on “Gender” as given below:

- A noun that stands for a male living being is said to be of the **masculine gender**.
- A noun that stands for a female living being is said to be of the **feminine gender**.
- A noun that stands for a non-living thing is said to be of the **neuter gender**.
- A noun that can stand for either a male or for a female is said to be of the **common gender**.

Exercise 1

Find the gender form of the coloured words. Write “M” for Masculine, “F” for Feminine, “N” for neuter and “C” for common gender.

1. A **mother** () loves her **child** () selflessly.
2. **John** () sat on a **chair** () and looked at the **teacher** ().
3. **Doctors** () should treat their **patients** () nicely.
4. The **master** () scolded the **maidservant** ().
5. The girl put the **flowers** () in the **vase** ().

Exercise 2

Rewrite the following sentences changing the nouns in bold from feminine to masculine.

1. The new **actress** () is my **sister**().
2. My **mother** () has gone to the market.
3. The **daughters** () took care of their **mothers** ().
4. The **princess** () had a pet **tigress** ().
5. **Madam** (), those **girls** () are talking in the class.

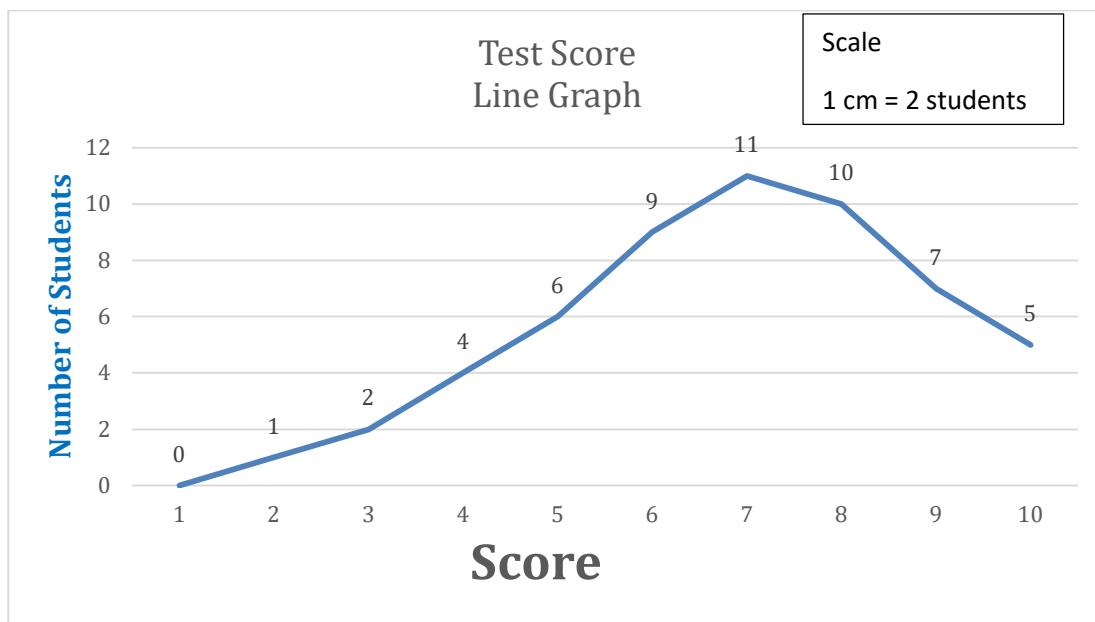
Task 2 :

Complete the question answers of 'Christmas Carol' (A) in your English note-book.

MATHS: Data Handling – Line graph

Do this work in your graph notebook.

Q1. Read the Line graph given below and answer the following questions.



- Q1. What was the most common score?
- Q2. How many students scored exactly half- marks?
- Q3. How many students scored less than half- marks?
- Q4. How many students scored more than 8 marks?

Q2. The table given below shows the number of cars sold during 6 months of a year. Represent the data through line graph and answer the following questions.

Months	Jan	Feb	March	April	May	June
No. of Cars sold	55	30	25	45	37	30

Q1. How many cars were sold in April?

Q2. In which two months were the same numbers of cars sold?

Q3. What is the difference in number of cars sold in the month of March and June?

Q4. What is the difference in number of cars sold between the months in which maximum and minimum cars were sold?

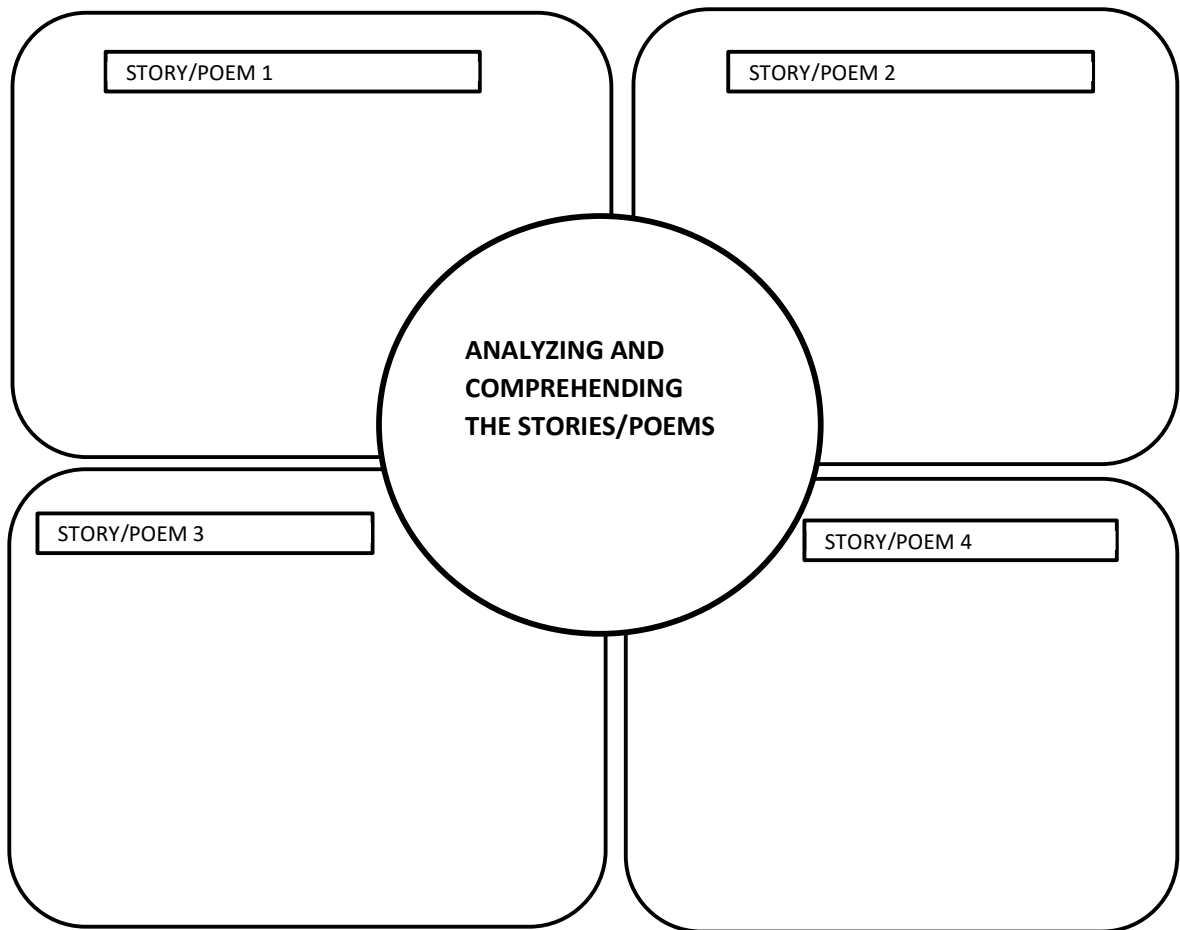
HINDI: पाठ्य पुस्तक में पृष्ठ संख्या **14-16** पर प्रदत्त ऐतिहासिक कहानी 'भिक्षा पात्र' पढ़कर लिंग शब्दों को ढूँढकर लिंग बदलकर कार्य -पुस्तिका में पूरा करिए ।

UOI:

Task 1 - Prepare for the **Group Presentation** on the story/drama/poem/ppt related to your choice of genre.

Task 2 - Analyze and comprehend the insight and information from any 4 stories/poems using Frayer model (**Formative Assessment 2**). Refer to the class presentation regarding the same.

FRAYER MODEL

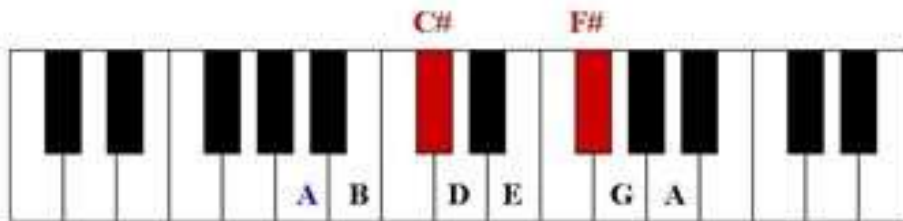


CONTENT RELEVANCE	DEVELOPMENT OF KEY CONCEPT	DEVELOPMENT OF ATL	OVERALL PRESENTATION	TOTAL
(ACCURATE AND WELL EXPLAINED)	(PERSPECTIVE)	(THINKING SKILLS)	(CREATIVITY, NEATNESS, USE OF LANGUAGE)	
(1)	(1)	(1)	(1)	(4)

G.K: Prepare for **Assessment** of States and Capitals of India through Google Form.

MUSIC:

S.A.	Play happy birthday song on piano or app with the help of notes given and record a video.
Checklist	<ul style="list-style-type: none">• GOOD RESEARCH WORK• KNOWLEDGEABLE• TIMELY SUBMISSION



Happy Birthday to You

Happy birthday to you,
A A B A D C#

Happy birthday to you,
A A B A E D

Happy birthday my darling,
A A A F# D C# B

Happy birthday to you.
G G F# D E D

May the good Lord bless you,
A A B A D C#

May the good Lord bless you,
A A B A E D

May the good Lord bless yo-ou,
A A A F# D C# B

Happy birthday to you.
G G F# D E D



P.E.: https://www.youtube.com/watch?v=TCfzAYP_4H4

Watch the video and practice basic **Breathing Exercise**.

